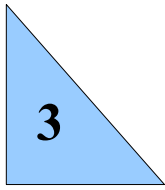



## 2-Dimensional Shapes

<http://free-worksheets.blogspot.com/>

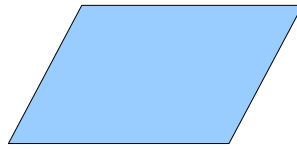
Count the number of sides and write the answer inside the shape.



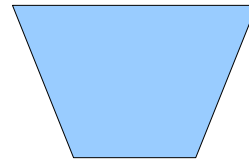
Triangle



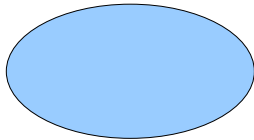
Square



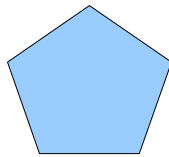
Parallelogram



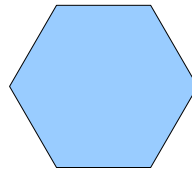
Trapezoid



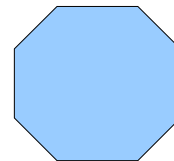
Oval or Ellipse



Pentagon



Hexagon



Octagon

Draw all the shapes and write their names below

