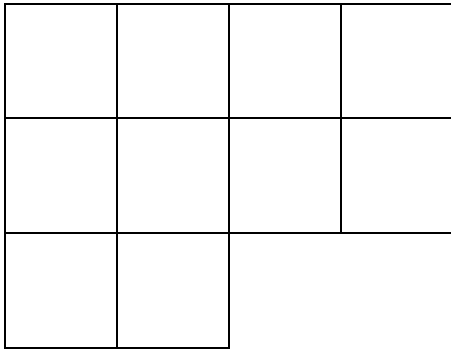




1) How many squares are there in the shape below?



Colour in half of the shape.



2) Colour in one tenth of the shape below. This is  $1/10^{\text{th}}$ .



3) How much of the shape is shaded?



4) How much of the shape is shaded?

