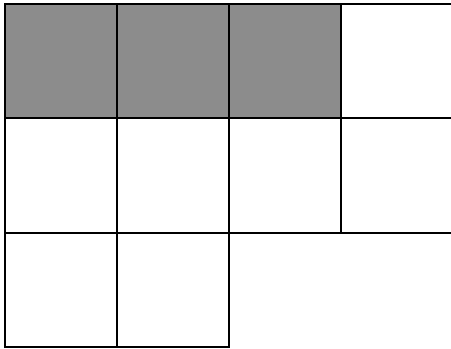




- 1) How many squares are there in the shape below? Three are shaded, so that is three tenths.



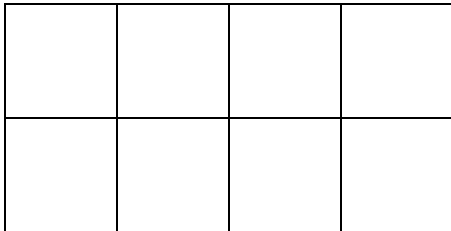
The number of shaded boxes

The total number of boxes

- 2) Colour in four tenths of the shape below. This is $4/10^{\text{th}}$.



- 3) Colour in five eighths of this shape?



- 4) How much of the shape is shaded?

