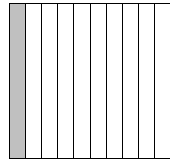


Fractions and Decimals - Fill in the blanks,

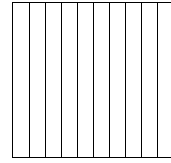
$\frac{1}{10}$

0.1



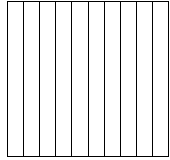
—

0.9



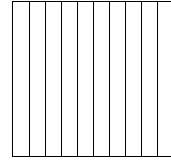
$\frac{3}{10}$

—



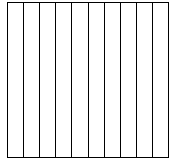
—

0.4



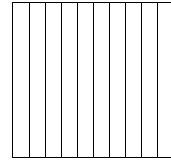
$\frac{6}{10}$

—



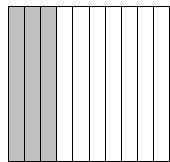
—

0.7



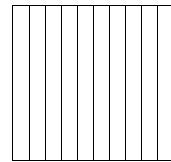
$\frac{—}{10}$

—



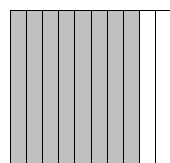
—

0.2



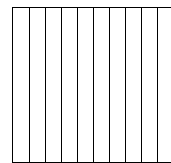
$\frac{—}{10}$

—




—

0.9



$\frac{5}{10}$

—



—

1.0

