





$$\boxed{4} + \boxed{} = \boxed{10}$$




$$\boxed{3} + \boxed{} = \boxed{5}$$




$$\boxed{6} + \boxed{} = \boxed{10}$$




$$\boxed{4} + \boxed{} = \boxed{5}$$




$$\boxed{8} - \boxed{} = \boxed{5}$$





$$\boxed{9} - \boxed{} = \boxed{5}$$



$$\boxed{6} - \boxed{} = \boxed{5}$$



$$\boxed{7} - \boxed{} = \boxed{5}$$



$$\boxed{5} - \boxed{} = \boxed{4}$$